

Total Marks: 45 + 5

Obt. Marks: _____

Grand Total: 50

Time: _____

Section: _____



/8

- 58 by 2 =
a. 29
c. 24
d. 25
- The odd number is _____ -
a. 4
b. 20
c. 3
- Write the place value of underlined digit 2957.
a. 30
b. 40
c. 50
- 2 hour = _____ min
a. 60min
b. 3600 min
c. 36000
- A square has _____ equal sides.
a. 2
b. 4
c. 3
- The angle smaller than a right angle is called _____ angle.
a. Obtuse
b. Right
c. Acute
- $2200 + 1900 =$ _____
a. 4100
b. 41000
c. 4200
- $4\text{m} =$ _____ cm
a. 4000
b. 40
c. 400

/6

b. 6478, 6457, 5467

/5

- a. 3kg600g: _____ g
b. 6kg100g: _____ g

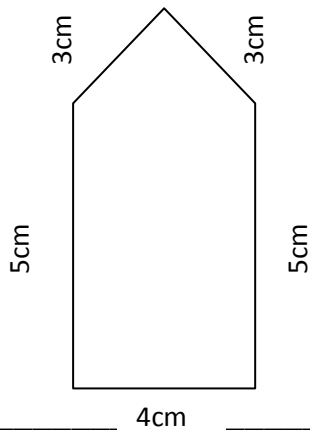
/5

[illegible]

Q. No. 5: Haroon spent 1 hour and 10 minutes fishing in a lake. How many minutes did he spend fishing? /4

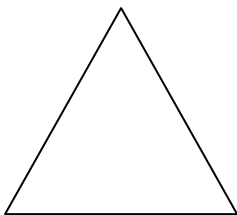
Q. No. 6: Find the perimeters of these figures. /3

Note: the following figure is not drawn to scale.




Q. No. 7: Look at these shapes and fill in the boxes below.

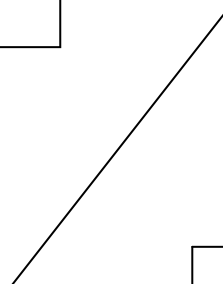
/4




A



D



C



B

- i. Which of these shapes have 1 right angle? _____
- ii. Which of these shapes have only acute angles? _____
- iii. Which of these shapes have an obtuse angles? _____
- iv. Which of these shapes have only right angle? _____

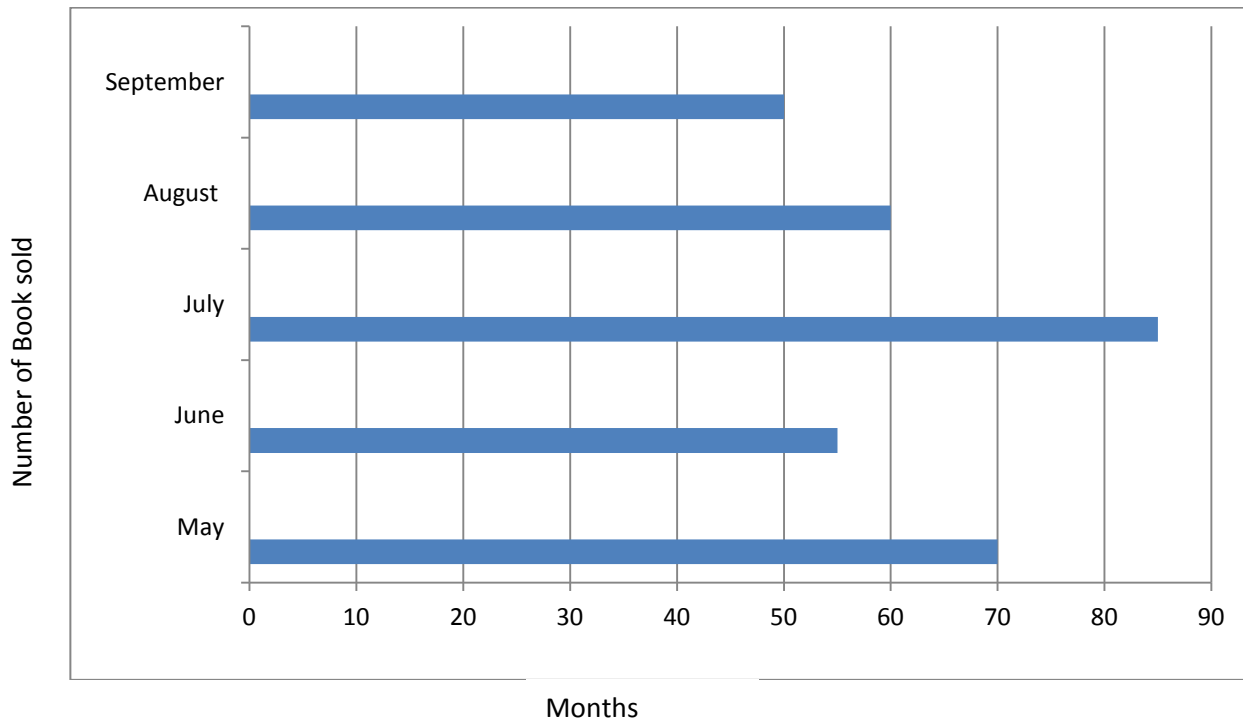
Q. No. 8: Circle the letters having perpendicular lines. /5

A E F H K L

M N X Y Z

q. No. 9: This bar graph shows the number of Islamic books sold in a book centre over a period of five months: /5

Sale Record



- i. How many less books were sold in June than in July? _____
- ii. How many more books were sold in May than in September? _____
- iii. In which month were 55 book sold? _____
- iv. In which month the sale was the highest? _____
- v. What is the total number of books sold from May to September? _____