

Paper: MathsTotal Marks: 20Month Test: November

Obt. Marks: _____

Theme/Unit: B(8-14)Grand Total: 45+5=50

Objective: _____ ID: _____

Time: _____

Name: _____ class: Four

Section: _____

Q. No. 1: Encircle the correct option: /10

1. Round off 7.523 to nearest whole number.
 - a. 6
 - b. 7.500
 - c. 7.42
 - d. 7.423
2. Express the fraction of $\frac{1}{2}$ as decimals _____.
 - a. 0.5
 - b. 2.5
 - c. 1.5
 - d. 0.05
 - e.
3. 44.31 round off to 1 decimal place.
 - a. 44.40
 - b. 44.30
 - c. 44
 - d. 45.3
4. There are _____ hours in a day.
 - a. 24
 - b. 12
 - c. 10
 - d. 48
5. The area of a rectangle = _____.
 - a. $L \cdot w$
 - b. $L \cdot l$
 - c. $L \cdot b \cdot l$
 - d. $B \cdot b$
6. The area of a figure is
 - a. 9cm^2
 - b. 6cm^2
 - c. 12 cm
 - d. 15 cm
7. 0.1 more than 2.4 is _____.
 - a. 2.6
 - b. 2.5
 - c. 0.5
 - d. 3.0
8. All the _____ angles in a rectangle are right angles.
 - a. 3
 - b. 2
 - c. 4
 - d. 5
9. A _____ figure is made up of 2 or more figures.
 - a. Rectangle
 - b. Composite
 - c. Square
 - d. Triangle
10. In 24 hour clock format, the hours start at _____.
 - a. Zero
 - b. 12
 - c. 23
 - d. 25

Q. No. 2: Define of mirror symmetry: /3

Q. No. 3: Tell the time in the 12-hour clock format. /3

- a. 03 50 _____
- b. 16 56 _____

Q. No. 4: Draw a square with using a protactor. "5cm" /5

Paper: MathsMonth Test: NovemberTheme/Unit: B(8-14)

Subjective:

ID: _____

Name: _____

class: FourTotal Marks: 25

Obt. Marks: _____

Grand Total: 45+5=50

Time: _____

Section: _____

Q. No. 1: Oral table

/5

Q. No. 2: Solve these:

/5

$$\begin{array}{r} 12 \ . \ 37 \\ - 0 \ . \ 99 \\ \hline \end{array}$$

$$\begin{array}{r} 9 \ . \ 60 \\ + 5 \ . \ 42 \\ \hline \end{array}$$

Q. No. 3(a): Multiply it:

/2 ½

$$\begin{array}{r} 5 \ . \ 05 \\ * \quad 5 \\ \hline \end{array}$$



(b): find the quotient. Round off the answer to the nearest whole number:

/2 ½

$$3 \sqrt{5.85}$$

Q. No. 4: Describe how squares and rectangles are alike and different and also colour it:

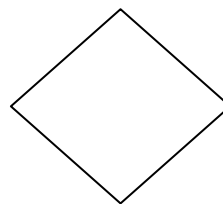
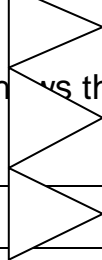



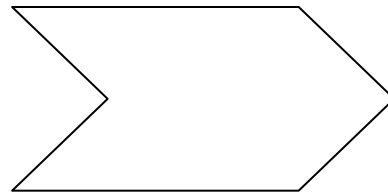

/4



Alike

Different

Q. No. 5: Tick the figures letters and numbers that are symmetric (horizontal or vertical) /6



Q. No. 6: the table given below shows the marks(out of 10) Madiha got in mathematics weekly tests. /5

Weeks	Marks
Week 1	3
Week 2	8
Week 3	5
Week 4	5

Week 5	9
--------	---

Draw a line graph.