

Q. No. 3: Write counting in figure. "531 to 540"

/10

Q. NO. 4: How many tens and ones:

/3

- i. 82 = _____ tens + _____ ones
 ii. 60 = _____ tens + _____ ones
 iii. 58 = _____ tens + _____ ones

Q. No. 5: Add:

/4

T	O
8	2
+ 2	3

T	O
5	8
+ 3	3

Q. No. 6: Subtraction: We can do it _____.

/5

Set A



Set B



19 - 15 =

is smaller than

Q. No. 7: What is the time on each clock?

/2

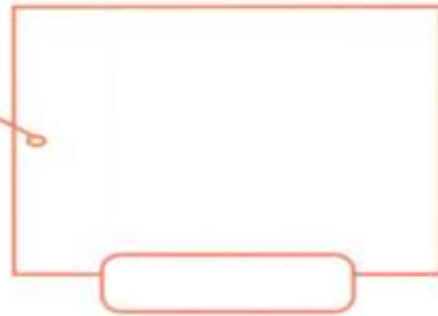


Q. No. 8: Draw and write the name of the shape?

/8


a)

4 equal sides
4 corners



b)

3 sides
3 corners



c)

1 side
no corner




d)

2 long sides
2 short sides
4 corners



(b). The following picture graph shows a number of different coloured beads: /3



Blue beads	
Green beads	
Red beads	

Let's answer these questions.

There are red beads.

There are green beads.

There are blue beads.